

A division of PhIE Learning Center

GATE AE- 2020 Q. PAPER**Section: General Aptitude**

Q.1 It is quarter past three in your watch. The angle between the hour hand and the minute hand is

- Options
1. 22.5°
 2. 15°
 3. 7.5°
 4. 0°

Q.2 A superadditive function $f(\cdot)$ satisfies the following property

$$f(x_1 + x_2) \geq f(x_1) + f(x_2)$$

Which of the following functions is a superadditive function for $x > 1$?

- Options
1. e^{-x}
 2. \sqrt{x}
 3. $1/x$
 4. e^x

Q.3 a, b, c are real numbers. The quadratic equation $ax^2 - bx + c = 0$ has equal roots, which is β , then

- Options
1. $\beta = b/a$
 2. $\beta^2 = ac$
 3. $\beta^3 = bc/(2a^2)$
 4. $b^2 \neq 4ac$

A division of PhIE Learning Center

- Q.4** The global financial crisis in 2008 is considered to be the most serious world-wide financial crisis, which started with the sub-prime lending crisis in USA in 2007. The sub-prime lending crisis led to the banking crisis in 2008 with the collapse of Lehman Brothers in 2008. The sub-prime lending refers to the provision of loans to those borrowers who may have difficulties in repaying loans, and it arises because of excess liquidity following the East Asian crisis.

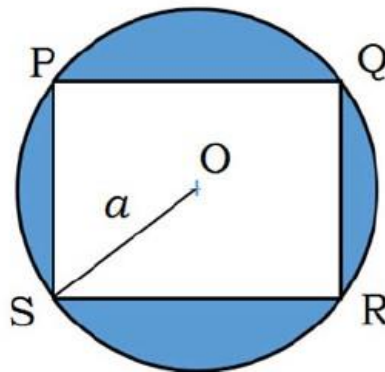
Which one of the following sequences shows the correct precedence as per the given passage?

- Options**
1. East Asian crisis → subprime lending crisis → banking crisis → global financial crisis.
 2. Banking crisis → subprime lending crisis → global financial crisis → East Asian crisis.
 3. Subprime lending crisis → global financial crisis → banking crisis → East Asian crisis.
 4. Global financial crisis → East Asian crisis → banking crisis → subprime lending crisis.

- Q.5** The untimely loss of life is a cause of serious global concern as thousands of people get killed _____ accidents every year while many other die _____ diseases like cardio vascular disease, cancer, etc.

- Options**
1. in, of
 2. from, from
 3. from, of
 4. during, from

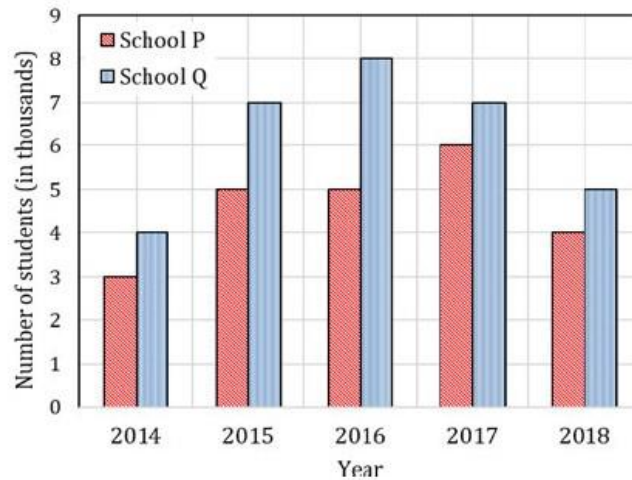
- Q.6** A circle with centre O is shown in the figure. A rectangle PQRS of maximum possible area is inscribed in the circle. If the radius of the circle is a , then the area of the shaded portion is _____.



- Options**
1. $\pi a^2 - 2a^2$
 2. $\pi a^2 - a^2$
 3. $\pi a^2 - 3a^2$
 4. $\pi a^2 - \sqrt{2}a^2$

A division of PhIE Learning Center

Q.7 The following figure shows the data of students enrolled in 5 years (2014 to 2018) for two schools P and Q. During this period, the ratio of the average number of the students enrolled in school P to the average of the difference of the number of students enrolled in schools P and Q is _____.



- Options
1. 23 : 8
 2. 31 : 23
 3. 23 : 31
 4. 8 : 23

Q.8 Select the word that fits the analogy:

Explicit: Implicit :: Express: _____

- Options
1. Impress
 2. Suppress
 3. Compress
 4. Repress

A division of PhIE Learning Center

Q.9 The Canadian constitution requires that equal importance be given to English and French. Last year, Air Canada lost a lawsuit, and had to pay a six-figure fine to a French-speaking couple after they filed complaints about formal in-flight announcements in English lasting 15 seconds, as opposed to informal 5 second messages in French.

The French-speaking couple were upset at _____.

- Options**
1. the in-flight announcements being made in English.
 2. the English announcements being longer than the French ones.
 3. the English announcements being clearer than the French ones.
 4. equal importance being given to English and French.

Q.10 He was not only accused of theft _____ of conspiracy.

- Options**
1. but even
 2. rather
 3. but also
 4. rather than

Section: AE-Aerospace Engineering

Q.1 $y = A e^{m x} + B e^{-m x}$, where A , B and m are constants, is a solution of

Options

1. $\frac{d^2 y}{dx^2} - m^2 y = 0$

2. $B \frac{d^2 y}{dx^2} + A y = 0$

3. $\frac{d^2 y}{dx^2} + m y = m^2$

4. $A \frac{d^2 y}{dx^2} + m^2 y = 0$

Q.2

The similarity solution for the diffusion equation, $\frac{\partial u}{\partial t} = \alpha \frac{\partial^2 u}{\partial x^2}$ is $u(x, t) = u(\eta)$,

where similarity variable, $\eta = \frac{x}{\sqrt{\alpha t}}$. If $u(x, 0) = e^{-x^2}$, the ratio $\frac{u(0, 1)}{u(0, 4)} = \text{_____}$

(round off to one decimal place).

Q.3 For conventional airplanes, which one of the following is true regarding roll

control derivative $\left(C_{l\delta_r} = \frac{\partial C_l}{\partial \delta_r} \right)$ and yaw control derivative $\left(C_{n\delta_r} = \frac{\partial C_n}{\partial \delta_r} \right)$, where

δ_r is rudder deflection?

Options 1. $C_{l\delta_r} > 0$ and $C_{n\delta_r} > 0$

2. $C_{l\delta_r} < 0$ and $C_{n\delta_r} < 0$

3. $C_{l\delta_r} < 0$ and $C_{n\delta_r} > 0$

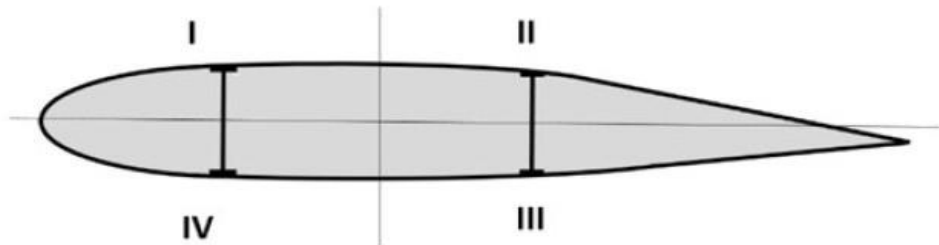
4. $C_{l\delta_r} > 0$ and $C_{n\delta_r} < 0$

A division of PHIE Learning Center

Q.4 For hyperbolic trajectory of a satellite of mass m having velocity V at a distance r from the center of earth (G : gravitational constant, M : mass of earth), which one of the following relations is true?

- Options
1. $\frac{1}{2}mV^2 > \frac{GMm}{r}$
 2. $\frac{1}{2}mV^2 < \frac{2GMm}{r}$
 3. $\frac{1}{2}mV^2 < \frac{GMm}{r}$
 4. $\frac{1}{2}mV^2 = \frac{GMm}{r}$

Q.5 The positive high angle-of-attack condition is obtained in a steady pull-out maneuver at the largest permissible angle-of-attack of the wing. Under this condition, at which of the following regions of the wing does the maximum tension occur?



- Options
1. IV
 2. II
 3. III
 4. I

Q.6 Burnout velocity of a space vehicle in a circular orbit at an angle 5 degrees above the local horizon around earth is 13.5 km/s. Tangential velocity of the space vehicle in the orbit is _____ km/s (round off to two decimal places).

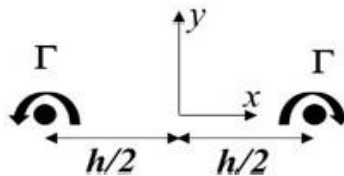
A division of PHIE Learning Center

Q.7 Consider the plane strain field given by $\varepsilon_{xx} = Ay^2 + x$, $\varepsilon_{yy} = Ax^2 + y$,

$\gamma_{xy} = Bxy + y$. The relation between A and B needed for this strain field to satisfy the compatibility condition is

- Options**
1. $B = 4A$
 2. $B = 2A$
 3. $B = A$
 4. $B = 3A$

Q.8 A pair of infinitely long, counter-rotating line vortices of the same circulation strength Γ are situated a distance h apart in a fluid, as shown in the figure. The vortices will



- Options**
1. rotate counter-clockwise about the midpoint with the tangential velocity at the line vortex equal to $\frac{\Gamma}{4\pi h}$
 2. rotate counter-clockwise about the midpoint with the tangential velocity at the line vortex equal to $\frac{\Gamma}{2\pi h}$
 3. translate along $+y$ direction with velocity at the line vortex equal to $\frac{\Gamma}{4\pi h}$
 4. translate along $+y$ direction with velocity at the line vortex equal to $\frac{\Gamma}{2\pi h}$

A division of PHIE Learning Center

Q.9 Air enters the rotor of an axial compressor stage with no pre-whirl ($C_{\theta} = 0$) and exits the rotor with whirl velocity, $C_{\theta} = 150$ m/s. The velocity of rotor vanes, U is 200 m/s. Assuming $C_p = 1005$ J/(kg K), the stagnation temperature rise across the rotor is _____ K (round off to one decimal place).

Q.10 For $f(x) = |x|$, with $\frac{df}{dx}$ denoting the derivative, the mean value theorem is not applicable because

Options 1. $f(x)$ is not continuous at $x = 0$

2. $f(x) = 0$ at $x = 0$

3. $\frac{df}{dx}$ is not defined at $x = 0$

4. $\frac{df}{dx} = 0$ at $x = 0$

Q.11 Which one of the following conditions needs to be satisfied for

$\phi = Ax^4 + By^4 + Cxy^3$ to be considered as an Airy's stress function?

Options 1. $A + B = 0$

2. $A + C = 0$

3. $A - B = 0$

4. $A - C = 0$

Q.12 The ratio of exit stagnation pressure to inlet stagnation pressure across the rotating impeller of a centrifugal compressor, operating with a closed exit, is

Options 1. 1

2. 0.5

3. 0

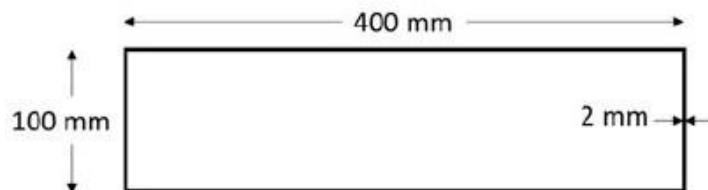
4. > 1

A division of PhIE Learning Center

- Q.13** An airplane of mass 5000 kg is flying at a constant speed of 360 km/h at the bottom of a vertical circle with a radius of 400 m, as shown in the figure. Assuming that the acceleration due to gravity is 9.8 m/s^2 , the load factor experienced at the center of gravity of the airplane is _____ (round off to two decimal places).



- Q.14** A thin walled beam of constant thickness shown in the figure is subjected to a torque of 3.2 kNm. If the shear modulus is 25 GPa, the angle of twist per unit length is _____ rad/m (round off to three decimal places).



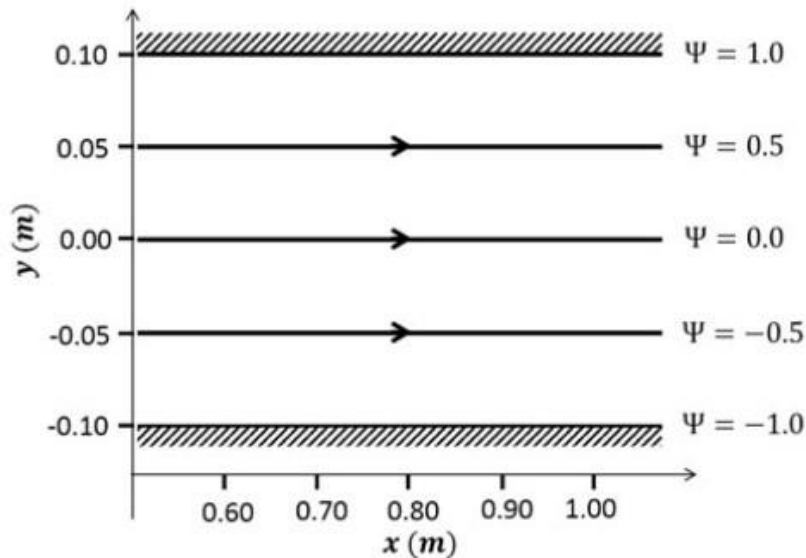
- Q.15** In aircraft engine thermodynamic cycle analysis, *perfectly expanded flow* in the nozzle means that the static pressure in the flow at the nozzle exit is equal to
- Options**
1. the stagnation pressure at the engine inlet.
 2. the static pressure at the nozzle inlet.
 3. the ambient pressure at the nozzle exit.
 4. the stagnation pressure at the nozzle exit.

A division of PhIE Learning Center

Q.16 Which of the following statements is true about the effect of increase in temperature on dynamic viscosity of water and air, at room temperature?

- Options**
1. It decreases for water and increases for air.
 2. It increases for both water and air.
 3. It decreases for both water and air.
 4. It increases for water and decreases for air.

Q.17 The streamlines of a steady two dimensional flow through a channel of height 0.2 m are plotted in the figure, where Ψ is the stream function in m^2/s . The volumetric flow rate per unit depth is



- Options**
1. $2.0 \text{ m}^2/\text{s}$
 2. $0.5 \text{ m}^2/\text{s}$
 3. $1.0 \text{ m}^2/\text{s}$
 4. $0.1 \text{ m}^2/\text{s}$

A division of PhIE Learning Center

Q.18 Which one of the following is a hypergolic propellant combination used in rocket engines?

- Options**
1. Unsymmetrical dimethyl hydrazine – nitrogen tetroxide
 2. Liquid hydrogen – liquid oxygen
 3. Rocket fuel RP-1 – liquid oxygen
 4. Liquid hydrogen – liquid fluorine

Q.19 Given $A = \begin{pmatrix} \sin \theta & \tan \theta \\ 0 & \cos \theta \end{pmatrix}$, the sum of squares of eigenvalues of A is

- Options**
1. $\cos^2 \theta$
 2. $\sin^2 \theta$
 3. $\tan^2 \theta$
 4. 1

Q.20 For the function $f(x) = \frac{e^{-\lambda}}{\sigma\sqrt{2\pi}}$, where $\lambda = \frac{1}{2\sigma^2}(x - \mu)^2$, and σ and μ are constants, the maximum occurs at

- Options**
1. $x = \sigma\sqrt{2\pi}$
 2. $x = \mu$
 3. $x = \sigma$
 4. $x = 2\sigma^2$

Q.21 Which of the following options can result in an increase in the Mach number of a supersonic flow in a duct?

- Options**
1. Removing heat from the flow
 2. Increasing the length of the duct
 3. Adding heat to the flow
 4. Inserting a convergent-divergent section with the same cross-sectional area at its inlet and exit planes

A division of PhIE Learning Center

- Q.22** Given access to the complete geometry, surface pressure and shear stress distribution over a body placed in a uniform flow, one can estimate
- Options**
1. the moment coefficient, and the force on the body.
 2. the moment coefficient, and the moment on the body.
 3. the force and the moment on the body.
 4. the force coefficient, and the force on the body.
- Q.23** The natural frequency of the first mode of a rectangular cross section cantilever aluminum beam is ω rad/s. If the material and cross-section remain the same, but the length of the beam is doubled, the first mode frequency will become
- Options**
1. $\frac{\omega}{4}$ rad/s
 2. 16ω rad/s
 3. 4ω rad/s
 4. $\frac{\omega}{16}$ rad/s
- Q.24** Velocity of an airplane in the body fixed axes is given as $[100 \ -10 \ 20]$ m/s. The sideslip angle is _____ degrees (*round off to two decimal places*).
- Q.25** Three long and slender aluminum bars of identical length are subjected to an axial tensile force. These bars have circular, triangular and rectangular cross sections, with same cross sectional area. If they yield at F_{circle} , $F_{triangle}$ and $F_{rectangle}$, respectively, which one of the following is true?
- Options**
1. $F_{circle} = F_{triangle} = F_{rectangle}$
 2. $F_{circle} > F_{triangle} > F_{rectangle}$
 3. $F_{triangle} > F_{circle} > F_{rectangle}$
 4. $F_{circle} < F_{triangle} < F_{rectangle}$

A division of PhIE Learning Center

Q.26 For three different airplanes A, B and C, the yawing moment coefficient (C_n) was measured in a wind-tunnel for three settings of sideslip angle β and tabulated as

	Airplane A	Airplane B	Airplane C
$\beta = -5 \text{ deg}$	-0.030	-0.025	0.040
$\beta = 0 \text{ deg}$	0	0	0
$\beta = 5 \text{ deg}$	0.030	0.025	-0.040

Which one of the following statements is true regarding directional static stability of the airplanes A, B and C?

- Options**
1. Only airplane C is stable, while both A and B are unstable.
 2. All three airplanes A, B, and C are stable.
 3. Airplane C is unstable, A and B are both stable with A less stable than B.
 4. Airplane C is unstable, A and B are stable with A being more stable than B.

Q.27 A critically damped single degree of freedom spring-mass-damper system used in a door closing mechanism becomes overdamped due to softening of the spring with extended use. If the new damping ratio (ξ_{new}) for overdamped condition is 1.2, the ratio of the original spring stiffness to the new spring stiffness ($k_{\text{org}} / k_{\text{new}}$), assuming that the other parameters remain unchanged, is _____ (round off to two decimal places).

A division of PHIE Learning Center

Q.28 The three dimensional strain-stress relation for an isotropic material, written in a general matrix form, is

$$\begin{Bmatrix} \epsilon_{xx} \\ \epsilon_{yy} \\ \epsilon_{zz} \\ \gamma_{yz} \\ \gamma_{xz} \\ \gamma_{xy} \end{Bmatrix} = \begin{bmatrix} A & C & C & 0 & 0 & 0 \\ C & A & C & 0 & 0 & 0 \\ C & C & A & 0 & 0 & 0 \\ 0 & 0 & 0 & B & 0 & 0 \\ 0 & 0 & 0 & 0 & B & 0 \\ 0 & 0 & 0 & 0 & 0 & B \end{bmatrix} \begin{Bmatrix} \sigma_{xx} \\ \sigma_{yy} \\ \sigma_{zz} \\ \tau_{yz} \\ \tau_{xz} \\ \tau_{xy} \end{Bmatrix}$$

A , B and C are compliances which depend on the elastic properties of the material.

Which one of the following is correct?

Options

1. $C = A + \frac{B}{2}$

2. $C = \frac{A}{2} - B$

3. $C = \frac{A}{2} + B$

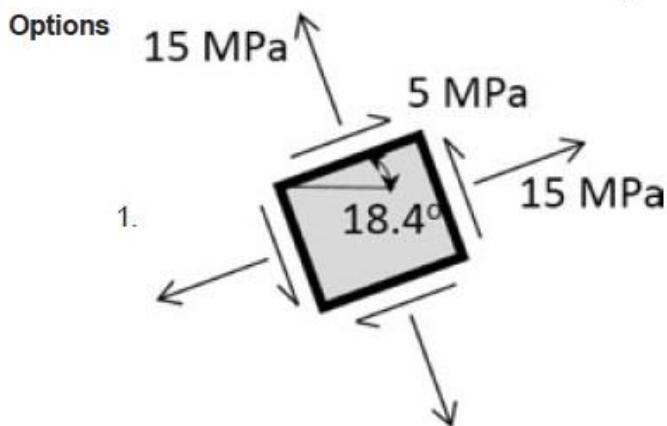
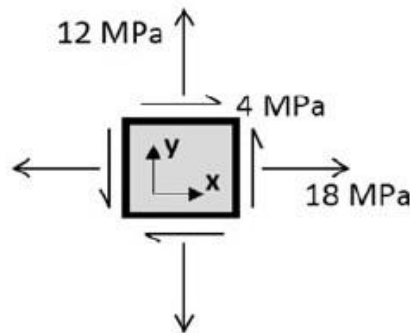
4. $C = A - \frac{B}{2}$

Q.29 A single engine, propeller driven, general aviation airplane is flying in cruise at sea-level condition (density of air at sea-level is 1.225 kg/m^3) with speed to cover maximum range. For drag coefficient $C_D = 0.025 + 0.049 C_L^2$ and wing loading $W/S = 9844 \text{ N/m}^2$, the speed of the airplane is _____ m/s (round off to one decimal place).

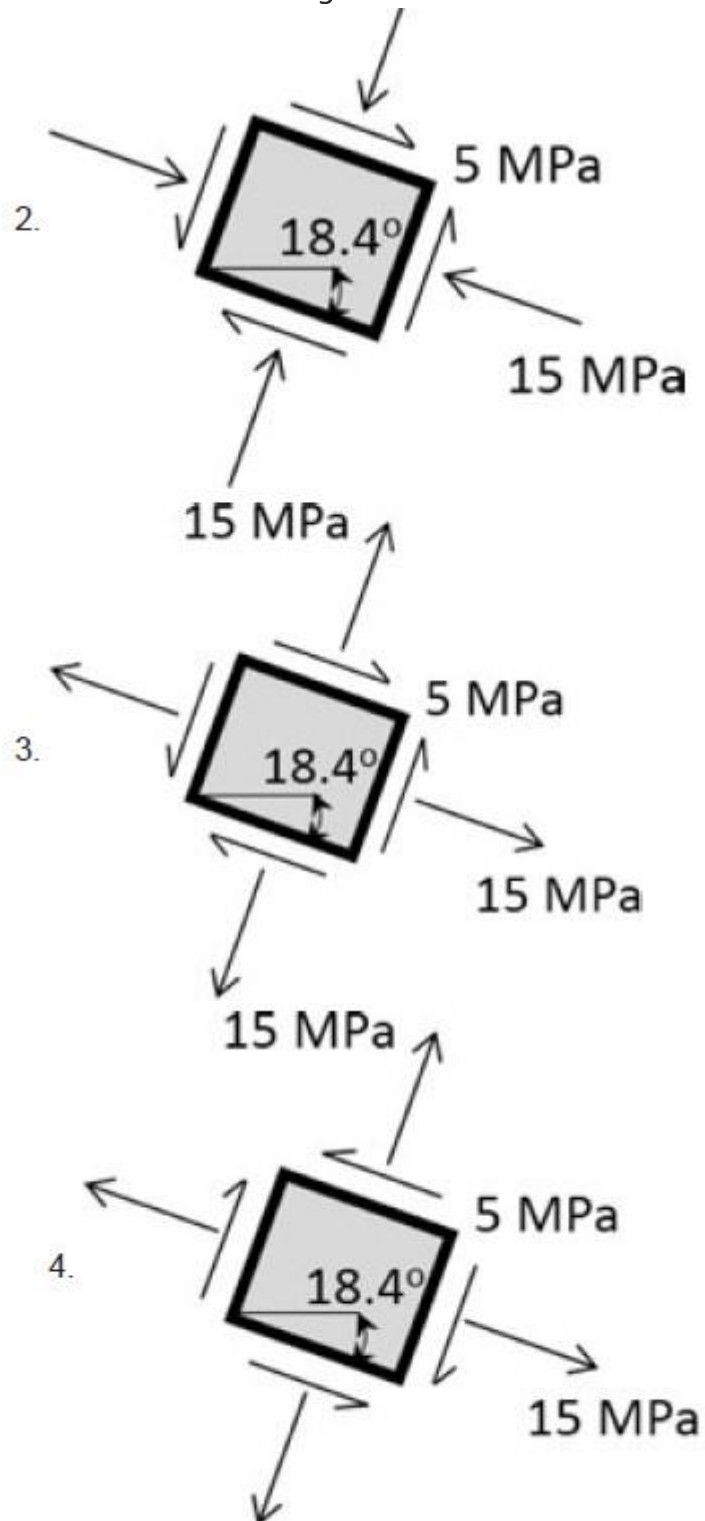
Q.30 The ratio of tangential velocities of a planet at the perihelion and the aphelion from the sun is 1.0339. Assuming that the planet's orbit around the sun is planar and elliptic, the value of eccentricity of the orbit is _____ (round off to three decimal places).

A division of PhIE Learning Center

- Q.31** The design flight Mach number of an ideal ramjet engine is 2.8. The stagnation temperature of air at the exit of the combustor is 2400 K. Assuming the specific heat ratio of 1.4 and gas constant of 287 J/(kg K), the velocity of air at the exit of the engine is _____ m/s (round off to one decimal place).
- Q.32** For the state of stress shown in the figure, which one of the following represents the correct free body diagram showing the maximum shear stress and the associated normal stresses?

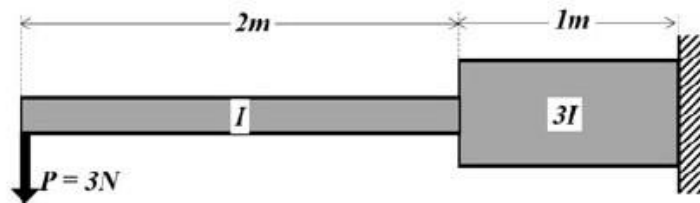


A division of PhIE Learning Center



A division of PhIE Learning Center

- Q.33** A load P is applied to the free end of a stepped cantilever beam as shown in the figure. The Young's modulus of the material is E , and the moments of inertia of the two sections of length 2 m and 1 m are I and $3I$, respectively. Ignoring transverse shear and stress concentration effects, the deflection at the point where the load is applied at the free end of the cantilever is



Options

1. $\frac{1}{3EI}$
2. $\frac{23}{243EI}$
3. $\frac{43}{3EI}$
4. $\frac{23}{3EI}$

- Q.34** The thickness of a laminar boundary layer (δ) over a flat plate is, $\frac{\delta}{x} = \frac{5.2}{\sqrt{Re_x}}$, where

x is measured from the leading edge along the length of the plate. The velocity profile within the boundary layer is idealized as varying linearly with y . For freestream velocity of 3 m/s and kinematic viscosity of $1.5 \times 10^{-5} \text{ m}^2/\text{s}$, the displacement thickness at 0.5 m from the leading edge is _____ mm (*round off to two decimal places*).

- Q.35** A Pitot tube mounted on the wing tip of an airplane flying at an altitude of 3 km measures a pressure of 0.72 bar, and the outside air temperature is 268.66 K. Take the sea level conditions as, pressure = 1.01 bar, temperature = 288.16 K, and density = 1.225 kg/m^3 . The acceleration due to gravity is 9.8 m/s^2 and the gas constant is 287 J/(kg K) . Assuming standard atmosphere, the equivalent airspeed for this airplane is _____ m/s (*round off to two decimal place*).

A division of PhIE Learning Center

Q.36 For a general aviation airplane with tail efficiency $\eta = 0.95$, horizontal tail volume ratio $V_H = 0.453$, downwash angle slope $\frac{d\varepsilon}{d\alpha} = 0.35$, wing lift curve slope $C_{L\alpha}^w = 4.8 \text{ rad}^{-1}$, horizontal tail lift curve slope $C_{L\alpha}^t = 4.4 \text{ rad}^{-1}$, shift in neutral point location as a percentage of mean aerodynamic chord is _____ (round off to two decimal places).

Q.37 A closed curve is expressed in parametric form as $x = a \cos \theta$ and $y = b \sin \theta$, where $a = 7 \text{ m}$ and $b = 5 \text{ m}$. Approximating $\pi = \frac{22}{7}$, which of the following is the area enclosed by the curve?

- Options**
1. 110 m^2
 2. 144 m^2
 3. 74 m^2
 4. 35 m^2

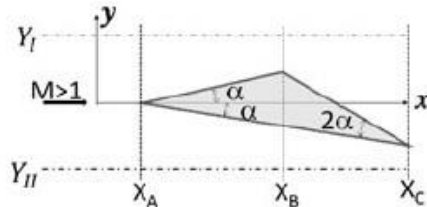
Q.38 The table shows the lift characteristics of an airfoil at low speeds. The maximum lift coefficient occurs at 16 degrees.

Angle of attack α (in degrees)	Lift coefficient C_l
0	0.10
4	0.53

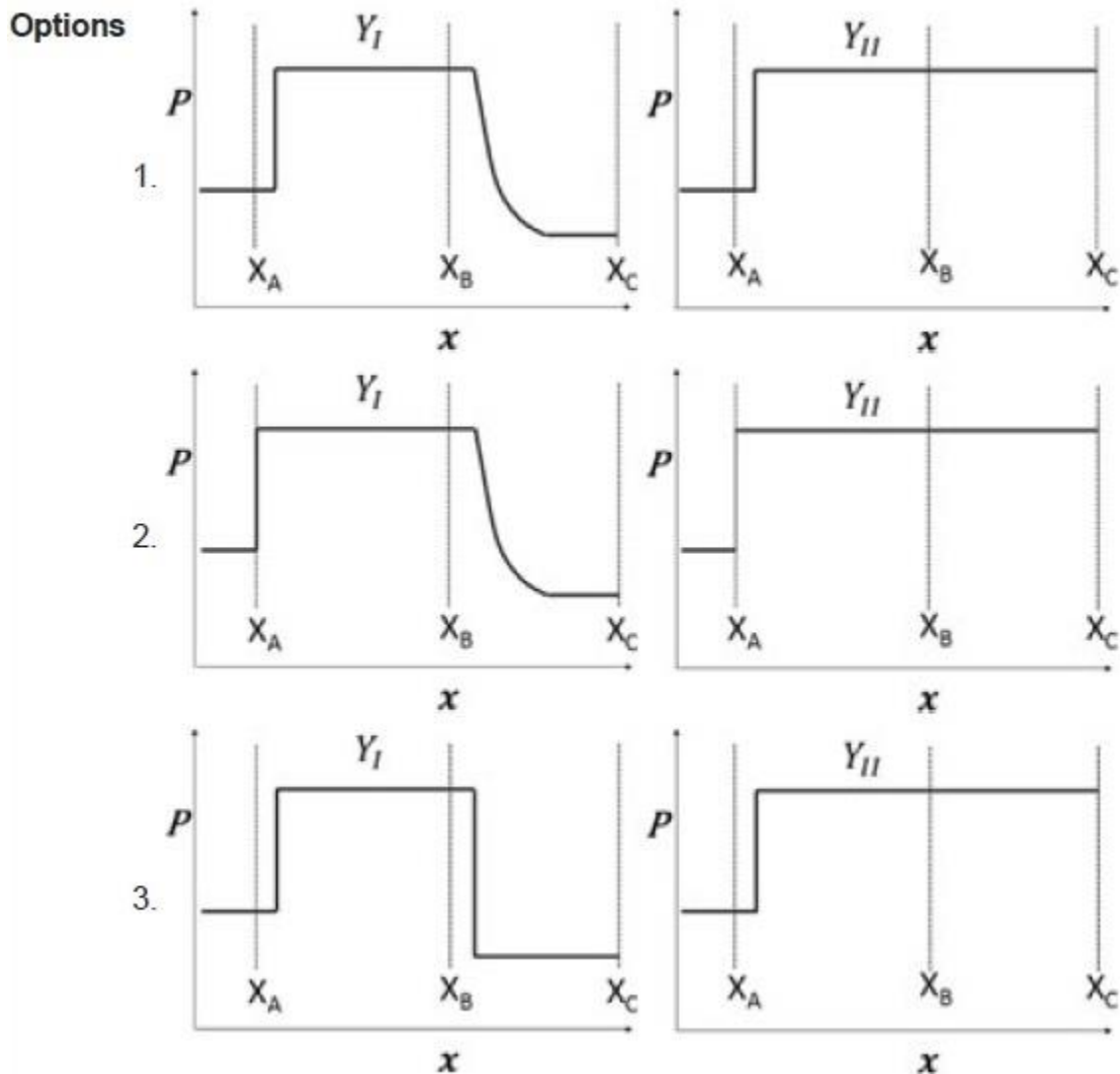
Using Prandtl-Glauert rule, the lift coefficient for the airfoil at the angle of attack of 6 degrees and free stream Mach number of 0.6 is _____ (round off to two decimal places).

A division of PHIE Learning Center

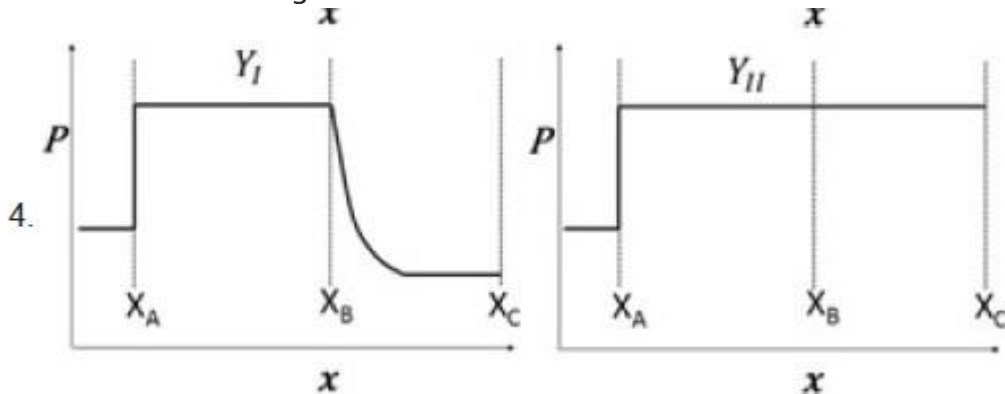
Q.39 A wedge shaped airfoil is placed in a supersonic flow as shown in the figure (not to scale). The corners of the wedge are at $x = x_A$, $x = x_B$, $x = x_C$, respectively.



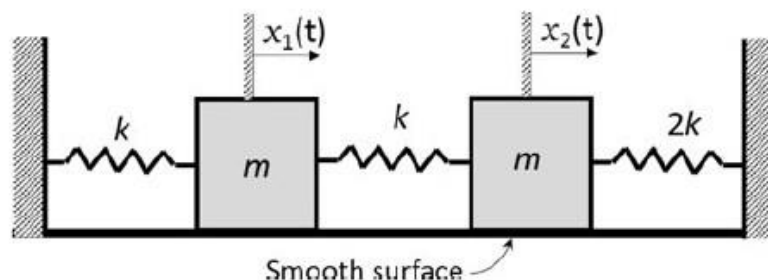
Which one of the following represents the correct static pressure profiles along $y = Y_I$ and $y = Y_{II}$?



A division of PhIE Learning Center

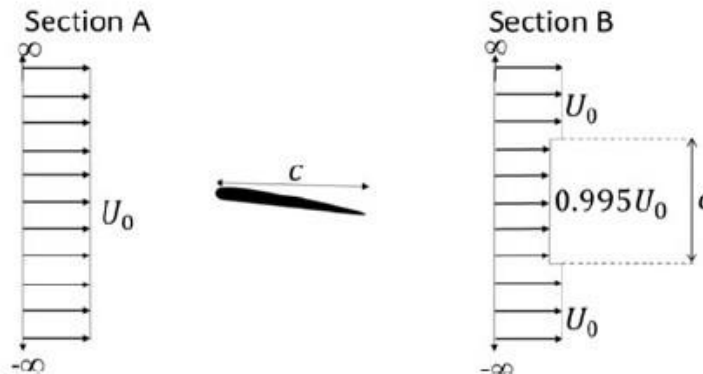


- Q.40** A rocket engine has a sea level specific impulse of 210 s and a nozzle throat area of 0.005 m^2 . While testing at sea level conditions, the characteristic velocity and pressure for the thrust chamber are 1900 m/s and 50 bar, respectively. Assume the acceleration due to gravity to be 9.8 m/s^2 . The thrust produced by the rocket engine is _____ kN (round off to one decimal place).
- Q.41** A solid circular shaft, made of ductile material with yield stress $\sigma_y = 280 \text{ MPa}$, is subjected to a torque of 10 kNm. Using the Tresca failure theory, the smallest radius of the shaft to avoid failure is _____ cm (round off to two decimal places).
- Q.42** If $\int_0^1 (x^2 - 2x + 1) dx$ is evaluated numerically using trapezoidal rule with four intervals, the difference between the numerically evaluated value and the analytical value of the integral is equal to _____ (round off to three decimal places).
- Q.43** The two masses of the two degree of freedom system shown in the figure are given initial displacements of 2 cm (x_1) and 1.24 cm (x_2). The system starts to vibrate in the first mode. The first mode shape of this system is $\phi_1 = [1 \ a]^T$, where $a =$ _____ (round off to two decimal places).



A division of PhIE Learning Center

- Q.44** A low speed uniform flow U_0 is incident on an airfoil of chord c . In the figure, the velocity profile some distance downstream of the airfoil is idealized as shown for section B. The static pressure at sections A and B is the same. The drag coefficient of the airfoil is _____ (round off to three decimal places).



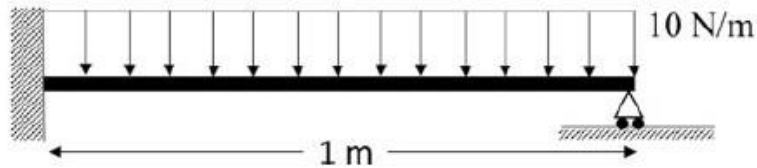
- Q.45** A wing of 15 m span with elliptic lift distribution is generating a lift of 80 kN at a speed of 90 m/s. The density of surrounding air is 1.2 kg/m^3 . The induced angle of attack at this condition is _____ degrees (round off to two decimal places).
- Q.46** An oblique shock is inclined at an angle of 35 degrees to the upstream flow of velocity 517.56 m/s. The deflection of the flow due to this shock is 5.75 degrees and the temperature downstream is 182.46 K. Assume the gas constant $R = 287 \text{ J/(kg K)}$, specific heat ratio $\gamma = 1.4$, and specific heat at constant pressure $C_p = 1005 \text{ J/(kg K)}$. Using conservation relations, the Mach number of the upstream flow can be obtained as _____ (round off to one decimal place).

- Q.47** The equation $x \frac{dx}{dy} + y = c$, where c is a constant, represents a family of

- Options**
1. circles
 2. hyperbolas
 3. parabolas
 4. exponential curves

A division of PhIE Learning Center

- Q.48** The eigenvalues for phugoid mode of a general aviation airplane at a stable cruise flight condition at low angle of attack are $\lambda_{1,2} = -0.02 \pm i 0.25$. If the acceleration due to gravity is 9.8 m/s^2 , the equilibrium speed of the airplane is _____ m/s (*round off to two decimal places*).
- Q.49** An airplane of mass 4000 kg and wing reference area 25 m^2 flying at sea level has a maximum lift coefficient of 1.65 . Assume density of air as 1.225 kg/m^3 and acceleration due to gravity as 9.8 m/s^2 . Using a factor of safety of 1.25 to account for additional unsteady lift during a sudden pull-up, the speed at which the airplane reaches a load factor of 3.2 is _____ m/s (*round off to two decimal places*).
- Q.50** As shown in the figure, a beam of length 1 m is rigidly supported at one end and simply supported at the other. Under the action of a uniformly distributed load of 10 N/m , the magnitude of the normal reaction force at the simply supported end is _____ N (*round off to two decimal places*).



A division of PhIE Learning Center

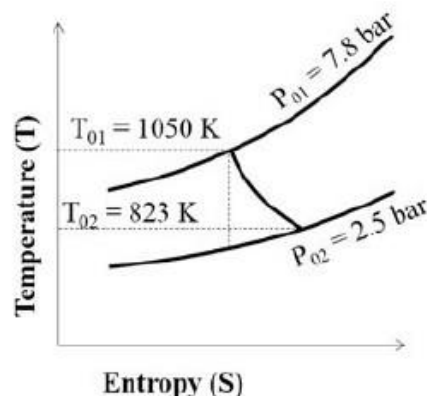
Q.51 The value of Poisson's ratio at which the shear modulus of an isotropic material is equal to the bulk modulus is

- Options
1. $\frac{1}{8}$
 2. $\frac{1}{4}$
 3. $\frac{1}{2}$
 4. $\frac{1}{6}$

Q.52 An axial compressor is designed to operate at a rotor speed of 15000 rpm and an inlet stagnation temperature of 300 K. During compressor testing, the inlet stagnation temperature of the compressor measured was 280 K. What should be the rotor speed for the compressor to develop the same performance characteristics during this test as in the design condition?

- Options
1. 15526 rpm
 2. 14000 rpm
 3. 16071 rpm
 4. 14491 rpm

Q.53 The figure shows the T-S diagram for an axial turbine stage.



Assuming specific heat ratio of 1.33 for the hot gas, the isentropic efficiency of the turbine stage is _____ % (round off to two decimal places).

A division of PhIE Learning Center

Q.54 The operating conditions of an aircraft engine combustor are as follows.

The rate of total enthalpy of air entering the combustor = 28.94 MJ/s.

The rate of total enthalpy of air leaving the combustor = 115.42 MJ/s.

Mass flow rate of air = 32 kg/s.

Air to fuel mass ratio = 15.6.

Lower heating value of the fuel = 46 MJ/kg.

The efficiency of the combustor is _____ % (round off to two decimal places).

Q.55

In the equation $AX = B$, $A = \begin{bmatrix} \frac{1}{\sqrt{2}} & 0 & \frac{1}{\sqrt{2}} \\ 0 & 1 & 0 \\ \frac{1}{\sqrt{2}} & 0 & \frac{-1}{\sqrt{2}} \end{bmatrix}$, $X = \begin{bmatrix} x \\ y \\ z \end{bmatrix}$, $B = \begin{bmatrix} 0 \\ 1 \\ -\sqrt{2} \end{bmatrix}$, where A is

an orthogonal matrix, the sum of the unknowns, $x + y + z =$ _____ (round off to one decimal place).

~~~~~THE END~~~~~

## GATE 2021/2022 Aerospace Engineering Class Room Coaching

### Course Details:-

| Contents         | Details                                                                                                                                 |
|------------------|-----------------------------------------------------------------------------------------------------------------------------------------|
| Types of Batches | Weekend (Saturday, Sunday) and Public Holidays                                                                                          |
| Teaching Hours   | Saturday (4pm-7.30pm)- Feb batch, (1pm-7.30pm)- May & July batch<br>Sunday (9.30am-5.30pm) Public Holidays (9.30am-5.30pm)- All batches |
| Course Duration  | 400 hours (6-8 months)                                                                                                                  |
| Syllabus Covered | All Technical Subjects, Engineering Mathematics & Aptitude                                                                              |
| Course Features  | <ul style="list-style-type: none"> <li>Timely coverage of technical &amp; non-technical syllabus</li> </ul>                             |



A division of PhIE Learning Center

| Contents                   | Details                                                                                                                                                                                                                                                                                                                                                        |
|----------------------------|----------------------------------------------------------------------------------------------------------------------------------------------------------------------------------------------------------------------------------------------------------------------------------------------------------------------------------------------------------------|
|                            | <ul style="list-style-type: none"> <li>• <a href="#">Study Materials</a> (all subjects)-E-form</li> <li>• <a href="#">Topic wise assignments</a>-E-form</li> <li>• Weekly <a href="#">online exam</a> exactly on GATE pattern</li> <li>• Doubts and problems solving classes</li> <li>• Fee-<a href="#">30K</a> – 1 year Course, 45k- 2 year Course</li> </ul> |
| Books & Reading References | <ul style="list-style-type: none"> <li>• Engineering Mathematics and Aptitude</li> <li>• All technical subjects</li> </ul>                                                                                                                                                                                                                                     |

Register for classes- <https://www.iitiansgateclasses.com/register-for-classes.aspx>

**Admission opens for GATE 2021/2022, Feb, May and July - 2020 Batch, Limited Seats! Hurry up! Register Now! Near by Hostel/PG Available for Boys and Girls**

**Team GATE Aerospace Engineering (AE):-**

| Name of Faculty   | Alma Institute   | Subject Expertise                        |
|-------------------|------------------|------------------------------------------|
| Mr Dinesh Kumar   | IIT Madras       | Aero Structures and Mechanical Vibration |
| Mr S Kumar        | IIT-Mumbai       | Aero Dynamics, Gas Dynamics              |
| Mr Navaneetha     | IIST- Trivendrum | Flight Mechanics                         |
| Mr Y Krishnan     | IIT- Kgp         | Flight Mechanics and Space Dynamics      |
| Mr Akshay K       | IISc Bangalore   | Aero Propulsion                          |
| Mr Minhazul Islam | IIT- Kgp         | Aero Propulsion                          |
| Mr Nithin S       | IISc Bangalore   | Aerodynamics and Flight Mechanics        |
| Mr Prashant       | IIT- Kgp         | Mathematics                              |
| Mr Karthik        | IISc- Bangalore  | Mathematics                              |
| Mr Shivankant     | IIT Roorki       | Numerical Aptitude                       |



IITians GATE CLASSES  
BANGALORE

Visit us: [www.iitiansgateclasses.com](http://www.iitiansgateclasses.com)

Mail us: [info@iitiansgateclasses.com](mailto:info@iitiansgateclasses.com)

A division of PhIE Learning Center

## **Result-**

**GATE 2019 - AIR- 2, 4, 42, 53, 58, 69, 98, 98, 114, 123, 142, 168, 168, 190, 205, 219, 236, 260, 286, 313, 333, 333, 342, 369, 375, 421, 489, 506, 517, 1510, 1920, 2359, 2625, 3413, 3896, 5100, 6362, 6508 and more**

**GATE 2018 - AIR-27, 87, 87, 108,265, 303, 314, 425, 425 436, 452 and more**

**Rank 3 ASR- APDCL (ME**

**Scholarship for GATE Qualified and University toppers**

# IITians GATE CLASSES

EXCLUSIVE GATE COACHING BY IIT/IISc GRADUATES

IITians GATE CLASSES  
BANGALORE

Visit us: [www.iitiansgateclasses.com](http://www.iitiansgateclasses.com)

Mail us: [info@iitiansgateclasses.com](mailto:info@iitiansgateclasses.com)

A division of PHIE Learning Center

## IITians GATE CLASSES

EXCLUSIVE GATE COACHING BY IIT/IISc GRADUATES

## GATE 2019 TOPPERS

WELL DONE IGCIAN

WISH YOU ALL THE VERY BEST



MEGHA BHARDWAJ  
HIT CHENNAI  
AIR 2 (AE)



MANOJ BAISHYA  
NIT DURGAPUR  
AIR 4 (AE)



T MANIKANTA LAKSHMAN  
JNTU HYDERABAD  
AIR 42 (AE)



SAI RAM KRISHNA  
AMRITA COIMBATORE  
AIR 53 (AE)



A GANADEV SHASHANKA  
ALLIANCE BANGALORE  
AIR 58 (AE)



ABHISHEK KUMAR  
DAYANAND SAGAR  
BANGALORE, AIR 69 (AE)



KAVITA YADAV  
FGIET RAEBARELI  
AIR 98 (AE)



SACHIN GUPTA  
FGIET RAEBARELI  
AIR 98 (AE)



NAGARAJA BHAGAV  
MVJ BANGALORE  
AIR 114 (AE)



AKSHAYA KUMARA G  
ALLIANCE BANGALORE  
AIR 123 (AE)



GUGHAN VS  
SRE COIMBATORE  
AIR 142 (AE)



SAI PHANI KUMAR  
HIT CHENNAI  
AIR 168 (AE)




ATUL PAL  
FGIET RAEBARELI  
AIR 168 (AE)



V PHANINDER REDDY  
HAA BANGALORE  
AIR 190 (AE)



RAMANDEEP KAUR  
GVIET, PUNJAB  
AIR 219 (AE)



SASI PAVAN T  
NIT WARANGAL  
GATE SCORE-772 (ECE)



SATHVIKA B  
AMRITA COIMBATORE  
GATE SCORE-645 (ECE)



ANISH KARAN  
MSR BANGALORE  
GATE SCORE-707 (EE)



ROSHINI D  
NIT TRICHY  
GATE SCORE-626 (EE)



U SUHAS  
BMS BANGALORE  
GATE SCORE-596 (ME)

# IITians GATE CLASSES

EXCLUSIVE GATE COACHING BY IIT/IISc GRADUATES

IITians GATE CLASSES  
BANGALORE

Visit us: [www.iitiansgateclasses.com](http://www.iitiansgateclasses.com)

Mail us: [info@iitiansgateclasses.com](mailto:info@iitiansgateclasses.com)

A division of PHIE Learning Center



**RAM GOPAL SONI**  
GVIET, Punjab  
Gate 2018 AIR 27(AE)  
Class Room Student



**V PHANINDER REDDY**  
HAA, Bangalore  
Gate 2018 AIR 87(AE)  
Class Room Student



**HIMANSHU BANKA**  
SRM, CHENNAI  
Gate 2018 AIR 87(AE)  
Class Room Student



**RAJ GOPAL SIT,**  
MANGALORE  
Gate 2018 AIR 108(AE)  
Class Room Student



**PARTHJIT MAZUMDAR**  
NIT-CALICUT  
RANK 3(ME) 2018, APDCL  
Class Room Student



Our Achievers Happy IGCians  
Wishing them great success Ahead



## Class Location

IITians GATE CLASSES

Hindustan College, Near Kalamandir, Chinapanhalli, Service Road, Outer Ring Rd, Anand Nagar, Aswath Nagar, Marathahalli, Bengaluru - 560037, Karnataka

Maps: <https://g.co/kgs/A7wczd>

Contact: 9740501604

Website: <https://www.iitiansgateclasses.com/>

Email: [iitiansgateclasses@gmail.com](mailto:iitiansgateclasses@gmail.com), [info@iitiansgateclasses.com](mailto:info@iitiansgateclasses.com)

Follow us on

Fb page: - <https://www.facebook.com/teamiitians>

You tube:- [https://www.youtube.com/channel/UCaaoHcufuy7BGQ7Wq\\_ohTtw](https://www.youtube.com/channel/UCaaoHcufuy7BGQ7Wq_ohTtw)

Twitter: - <https://twitter.com/teamiitians>

Intagram:- <https://www.instagram.com/teamiitians/>

Linkedin: - <https://www.linkedin.com/company/iitians-gate-classes>